


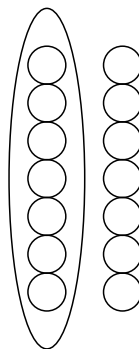
Name: \_\_\_\_\_

Schreibe die **Malaufgabe**. Finde auch die **Tauschaufgabe!**



$5 \cdot 2 = \underline{\quad}$

$2 \cdot 5 = \underline{\quad}$



$2 \cdot 7 = \underline{\quad}$

\_\_\_\_\_



\_\_\_\_\_

\_\_\_\_\_



\_\_\_\_\_


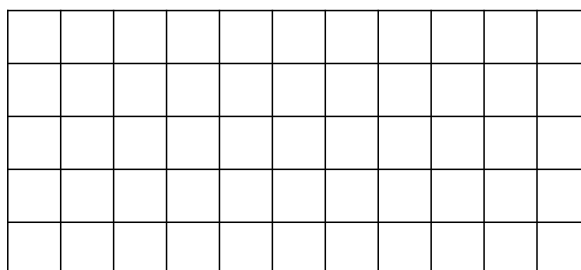
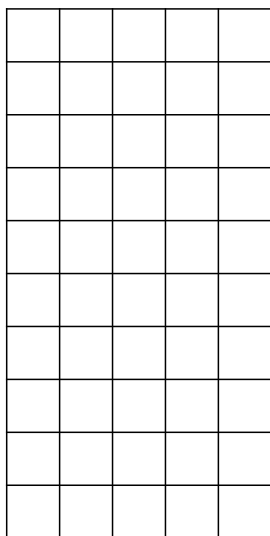
\_\_\_\_\_

Zeichne Punkte zur Malaufgabe und zur Tauschaufgabe!



$9 \cdot 2 = \underline{\quad}$

$2 \cdot 9 = \underline{\quad}$



Schreibe die Tauschaufgabe!

$5 + 5 = \underline{\quad}$

$2 + 2 + 2 + 2 + 2 + 2 = \underline{\quad}$

$7 + 7 = \underline{\quad}$

$2 \cdot 5 = \underline{\quad}$

\_\_\_\_\_

\_\_\_\_\_

$5 \cdot \underline{\quad} = \underline{\quad}$

\_\_\_\_\_

\_\_\_\_\_

$7 \cdot 2 = \underline{\quad}$

$9 \cdot 2 = \underline{\quad}$

$4 \cdot 2 = \underline{\quad}$

$2 \cdot \underline{\quad} = \underline{\quad}$

\_\_\_\_\_

\_\_\_\_\_